

PRIPREMA ZA 5 ISPIT ZNANJA

1. Dopuni:

a) $51 \text{ m} = \underline{\hspace{2cm}} \text{ cm}$

b) $9300 \text{ mm} = \underline{\hspace{2cm}} \text{ dm}$

2. Koliko kutnih minuta ima:

$$7^\circ =$$

3. Koliko kutnih sekundi ima:

$$15^\circ =$$

4. Koliko je stupnjeva:

$$1860' =$$

5. Koliko je stupnjeva:

$$7200'' =$$

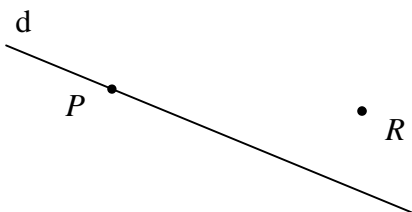
6. Koliko je kutnih minuta:

$$600'' =$$

7. Koliko je kutnih minuta i sekunda:

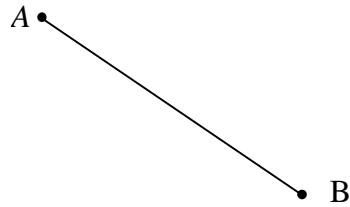
$$500'' =$$

8. a) Kroz točke P i R nacrtaj pravce p i r koji su okomiti na pravac d .

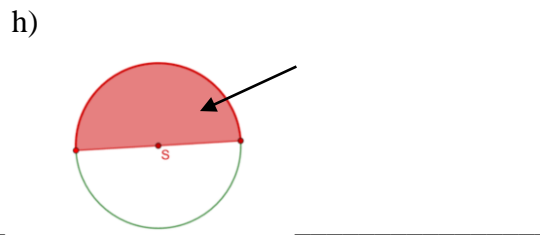

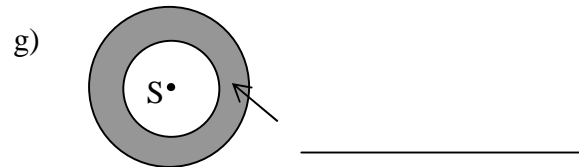
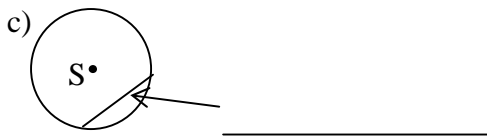
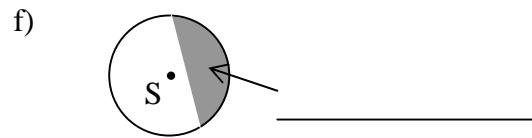
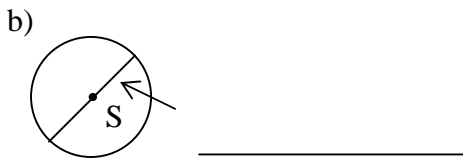
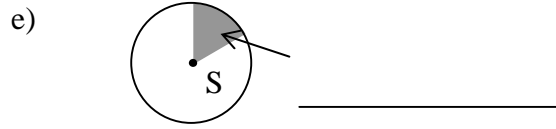
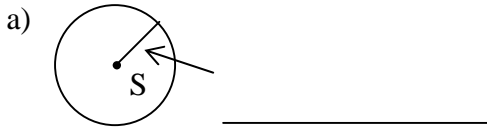


b) U kakvom su međusobnom položaju pravci p i r na toj slici?

9. Pomoću šestara konstruiraj simetriju dužine AB :



4. Uz svaku sličicu dopiši što je prikazano na njoj:



5. a) Nacrtaj kružnicu sa središtem S i **polumjerom** 23 mm.

b) Nacrtaj krug sa središtem A i **promjerom** 6 cm.

6. Razvrstaj kutove: 78° , 298° , 90° , 125° , 360° , 180° , 0° prema vrsti:

- a) Nul kut:
- b) Šiljasti kut:
- c) Pravi kut:
- d) Tupi kut:
- e) Ispruženi kut:
- f) Izbočeni kut:
- g) Puni kut:

